



THE LAIDLAW MEMORIAL SCHOOL & JUNIOR COLLEGE,
KETTI
ENTRANCE EXAMINATION 2021-2022
SUBJECT : MATHEMATICS

CLASS: I (1)
READING TIME : 5 MINUTES
WRITING TIME : 1 HOUR



DATE: //
TOTAL MARKS: 25
NO OF PAGES:

Name : _____


I. Write the missing numbers. [2 Marks]

1						7			
		13						19	

II. Count and write how many. [2 Marks]



III. Draw what comes next in the pattern. [1 Mark]



IV. Skip count by 5's and write the missing number [2 Marks]

5 , ___ , 15 , 20 , ___ , 30 , 35 , ___ , ___ , 50

V. Count backwards, write the missing numbers. [2 Marks]



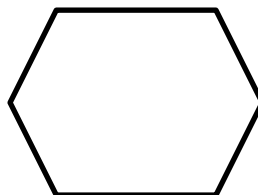

<u>10</u>		<u>8</u>							<u>1</u>
-----------	--	----------	--	--	--	--	--	--	----------

VI. 1.Colour the rectangle red. [4 Marks]

2.Put an X on the triangle.

3.Circle the square.

4.Draw an oval inside the diamond.



VII. 1.Circle the heavier object and tick the lighter object. [1 Marks]

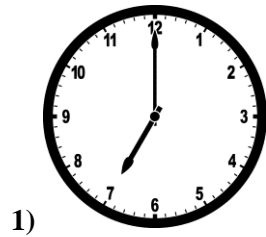


2. Circle the shorter object and tick the longer object. [1 Marks]

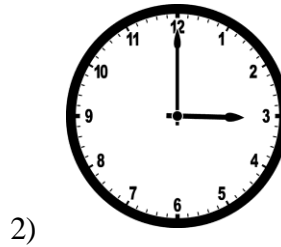


VIII. What time it is?

[2 Marks]



_____ 'o clock



_____ 'o clock

IX. Add or Subtract.

[2 marks]

1) 2

+4

2) 6

- 5

X. 1.Circle the 2nd balloon.

[1 Mark]

2.Put a X on the 5th balloon.

1st

