



**THE LAIDLAW MEMORIAL SCHOOL & JUNIOR COLLEGE,
KETTI
ENTRANCE EXAMINATION 2022-2023
SUBJECT: MATHEMATICS**

CLASS: II

DATE:

READING TIME: 5 MINUTES

TOTAL MARKS: 25

WRITING TIME: I HOUR

NO OF PAGES: 4



I. FILL IN THE MISSING NUMBERS

5 MARKS

| | | | | |
|----|--|----|----|----|
| 11 | | | | 15 |
| | | 18 | | |
| 21 | | | 24 | |

II. WRITE THE NUMBER NAMES FOR :

3 MARKS

1. 30 - _____
2. 55 - _____
3. 48 - _____

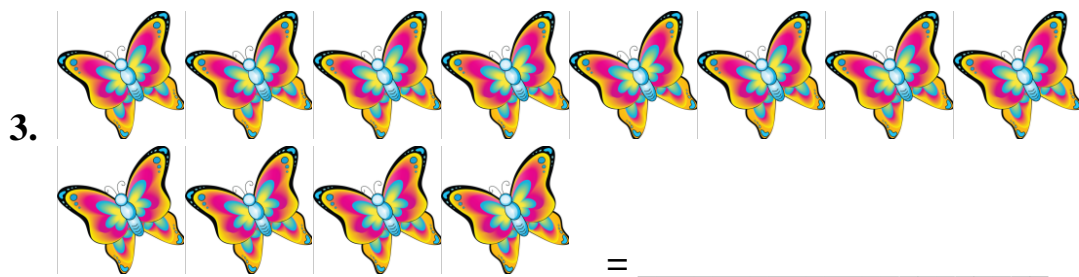
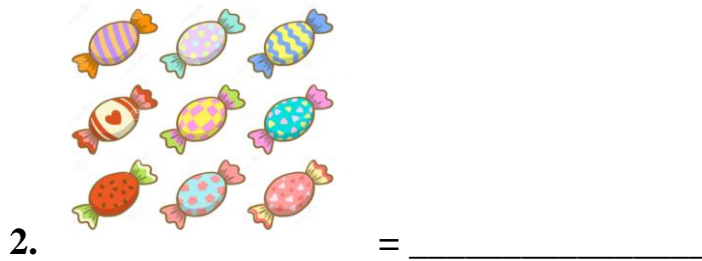

III. WRITE THE NUMBER :

2 MARKS

1. FIFTY TWO - _____
2. TWENTY - _____

IV. COUNT AND WRITE :

3 MARKS



V. ADD THE FOLLOWING

[2 x 3 = 6 MARKS]

1.
$$\begin{array}{r} 1 \quad 1 \\ + 1 \quad 2 \\ \hline \end{array}$$

2.
$$\begin{array}{r} 2 \quad 7 \\ + 1 \quad 0 \\ \hline \end{array}$$

3.
$$\begin{array}{r} 4 \quad 3 \\ + 5 \quad 5 \\ \hline \end{array}$$


VI. WHAT ARE THESE SHAPES CALLED? CHOOSE FROM THE OPTIONS GIVEN 3 MARKS

1.



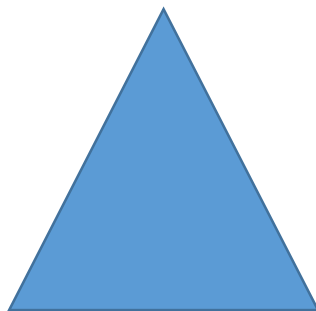
- a) CIRCLE b) SQUARE c) RECTANGLE
-

2.



- a) CIRCLE b) TRIANGLE c) DIAMOND
-

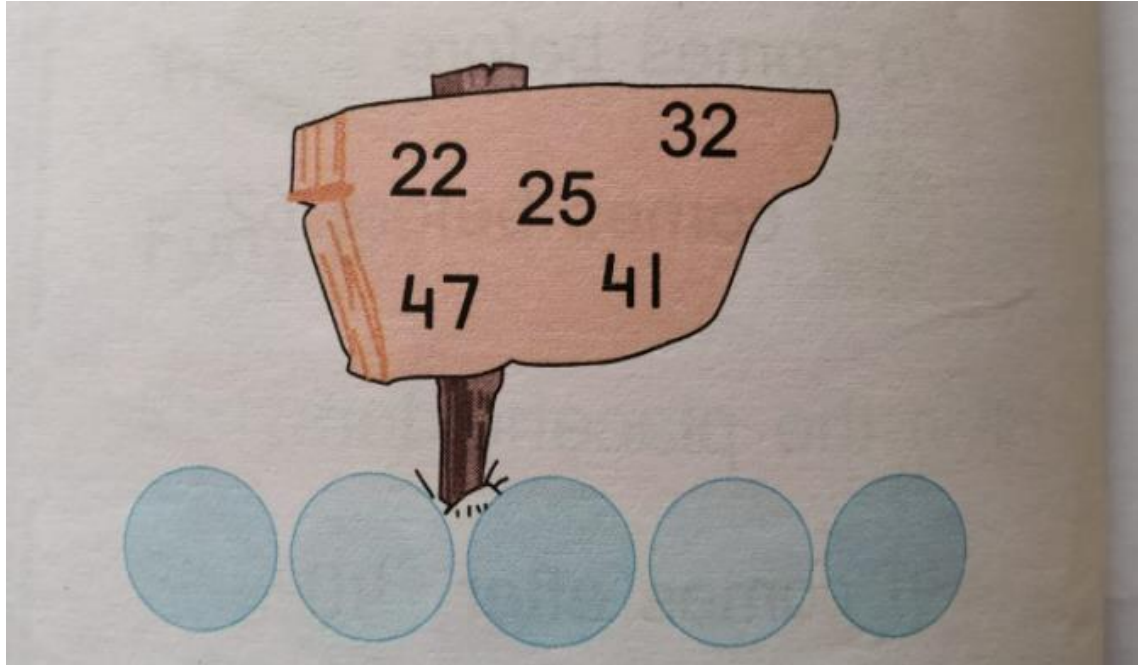
3.



- a) RECTANGLE b) SQUARE c) TRIANGLE
-

VII. WRITE THE NUMBERS FROM THE BOARD IN INCREASING ORDER

3 MARKS



_____ **ALL THE BEST** _____