



**THE LAIDLAW MEMORIAL SCHOOL & JUNIOR COLLEGE,  
KETTI  
ENTRANCE EXAMINATION-(2023-2024)  
SUBJECT: MATHEMATICS**

**CLASS: I**

**DATE: / /202**

**READING TIME: 15 MINUTES**

**TOTAL MARKS: 25**

**WRITING TIME: 1 HOUR**

**NO OF PAGES: 07**

**I. Write the missing numbers.**


**2 Marks**

1				5					
								19	


**II. Count and write.**



**2 Marks**

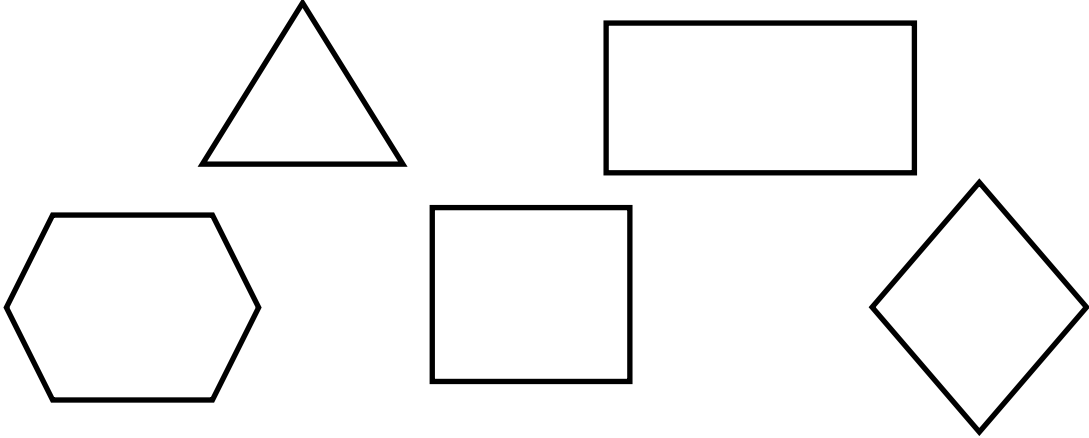

1.






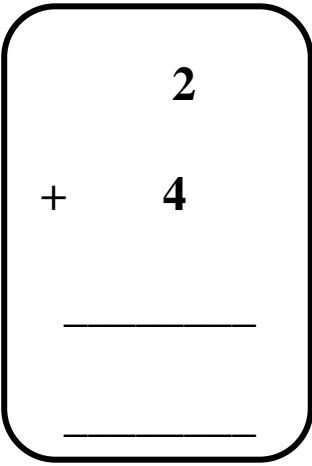
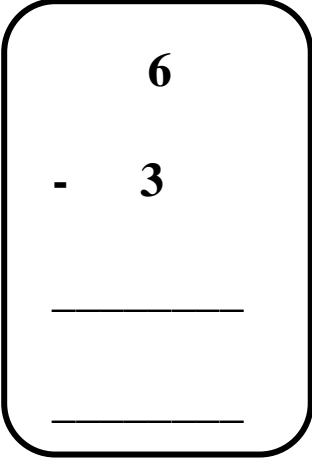
2.



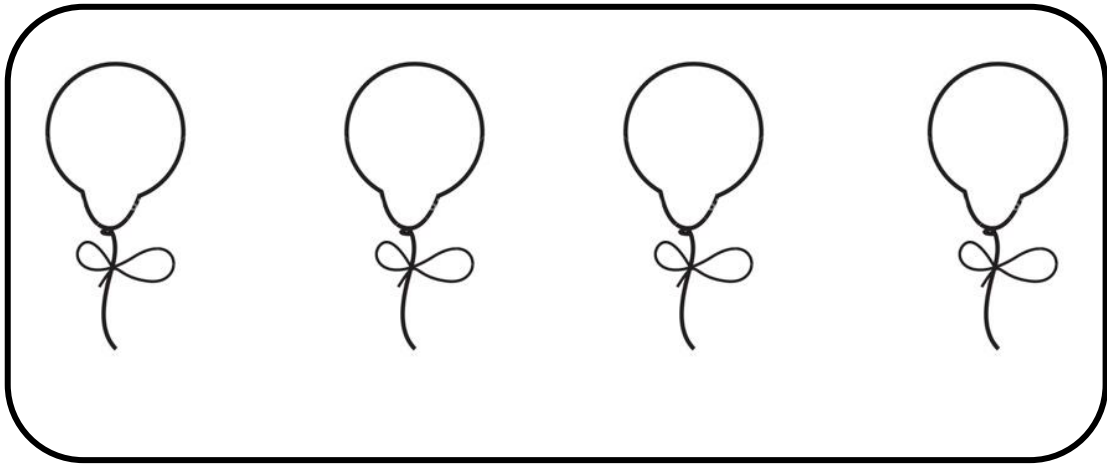
<b>III.</b>	<b>Draw what comes next in the pattern.</b>	<b>2 Marks</b>										
<b>1.</b>												
<b>2.</b>												
<b>IV.</b>	<b>Skip count by 5's and write the missing number.</b>	<b>2 Marks</b>										
<p>5, _____, 15, _____, 25, _____, _____, 40, _____, 50</p>												
<b>V.</b>	<b>Count backwards and write the missing numbers.</b>	<b>2 Marks</b>										
<table border="1" data-bbox="285 1472 1430 1635"> <tr> <td data-bbox="285 1472 404 1635"><b>10</b></td> <td data-bbox="404 1472 521 1635"></td> <td data-bbox="521 1472 638 1635"></td> <td data-bbox="638 1472 755 1635"></td> <td data-bbox="755 1472 872 1635"><b>6</b></td> <td data-bbox="872 1472 989 1635"></td> <td data-bbox="989 1472 1105 1635"></td> <td data-bbox="1105 1472 1222 1635"></td> <td data-bbox="1222 1472 1339 1635"></td> <td data-bbox="1339 1472 1430 1635"><b>1</b></td> </tr> </table>			<b>10</b>				<b>6</b>					<b>1</b>
<b>10</b>				<b>6</b>					<b>1</b>			

<b>VI.</b>	<b>Follow the instructions.</b>	<b>4 Marks</b>
<p><b>1.</b></p> <p><b>2.</b></p> <p><b>3.</b></p> <p><b>4.</b></p>	<p><b>Colour the rectangle red.</b></p> <p><b>Put an X on the triangle.</b></p> <p><b>Circle the square.</b></p> <p><b>Draw an oval inside the diamond.</b></p> <div style="text-align: center;">  </div>	
<b>VII.</b>	<b>Circle the heavier object and tick the lighter object.</b>	<b>1 Mark</b>
	<div style="text-align: center;">  </div>	


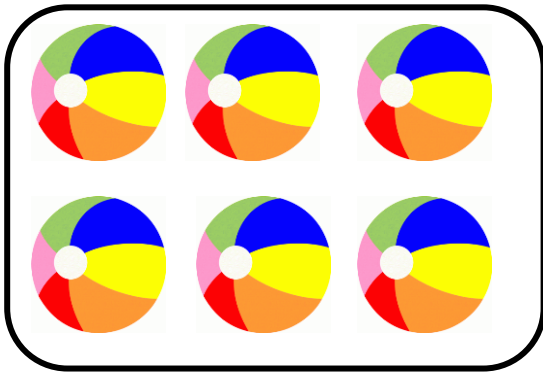
VIII.	<b>Circle the shorter object and tick the longer object.</b>	<b>1 Mark</b>
		
IX.	<b>What time it is?</b>	<b>2 Marks</b>
1.	 <input data-bbox="358 1283 618 1367" type="text"/>	
2.	 <input data-bbox="358 1724 618 1808" type="text"/>	

<b>X.</b>	<b>Add or Subtract.</b>	<b>2 Marks</b>
<b>1.</b>	 $\begin{array}{r} 2 \\ + 4 \\ \hline \hline \end{array}$	
<b>2.</b>	 $\begin{array}{r} 6 \\ - 3 \\ \hline \hline \end{array}$	

**X. Colour the 2<sup>nd</sup> balloon. 1 Mark**



**X. Tick the set which has more objects and cross the set which has lesser objects. 1 Mark**



<b>XI.</b>	<b>Greater than or lesser than “&gt; or &lt;”</b>	<b>2 Mark</b>
1.	7 <input type="text"/> 1	
2.	6 <input type="text"/> 9	
<b>XI.</b>	<b>Write the numbers before after and in between.</b>	<b>1 Mark</b>
1.	7 <input type="text"/>	
2.	<input type="text"/> 9	
3.	<input type="text"/> 3 <input type="text"/>	

