

I. Write the number names for the following: (10x1=10)

20	
25	
38	
37	
43	
50	
69	
80	
93	
100	

III: Addition (1x1=1)

T	O
5	4
+ 3	2





IV: Subtraction

(1x1=1)

T	O
8	7
-3	2

V: Colour and names the Shapes

(3x1=3)



All the best!